




WOW of the Week

Every day is a chance to **Learn**

Explain the changes that happened in the Neolithic period.



In the neolithic period when they started to get seeds and make flour out of it and get milk and flow and make bread.

When they stop killing ~~the~~ ^{animals} after that to eat it to save over animals and to get more milk to use the milk when they get older.

Stones

Dawid 3H

Handwritten notes on graph paper with diagrams and lists.

Diagram A: A line with points A, B, C, D. B is between A and C, C is between B and D.

Diagram B: A line with points A, B, C, D. B is between A and C, C is between B and D.

Diagram C: A line with points A, B, C, D. B is between A and C, C is between B and D.

Diagram D: A line with points A, B, C, D. B is between A and C, C is between B and D.

Diagram E: A line with points A, B, C, D. B is between A and C, C is between B and D.

Diagram F: A line with points A, B, C, D. B is between A and C, C is between B and D.

Diagram G: A line with points A, B, C, D. B is between A and C, C is between B and D.

Diagram H: A line with points A, B, C, D. B is between A and C, C is between B and D.

Diagram I: A line with points A, B, C, D. B is between A and C, C is between B and D.

Diagram J: A line with points A, B, C, D. B is between A and C, C is between B and D.

Diagram K: A line with points A, B, C, D. B is between A and C, C is between B and D.

Diagram L: A line with points A, B, C, D. B is between A and C, C is between B and D.

Diagram M: A line with points A, B, C, D. B is between A and C, C is between B and D.

Diagram N: A line with points A, B, C, D. B is between A and C, C is between B and D.

Diagram O: A line with points A, B, C, D. B is between A and C, C is between B and D.

Diagram P: A line with points A, B, C, D. B is between A and C, C is between B and D.

Diagram Q: A line with points A, B, C, D. B is between A and C, C is between B and D.

Diagram R: A line with points A, B, C, D. B is between A and C, C is between B and D.

Diagram S: A line with points A, B, C, D. B is between A and C, C is between B and D.

Diagram T: A line with points A, B, C, D. B is between A and C, C is between B and D.

Diagram U: A line with points A, B, C, D. B is between A and C, C is between B and D.


Diagram V: A line with points A, B, C, D. B is between A and C, C is between B and D.

Diagram W: A line with points A, B, C, D. B is between A and C, C is between B and D.


Diagram X: A line with points A, B, C, D. B is between A and C, C is between B and D.

Diagram Y: A line with points A, B, C, D. B is between A and C, C is between B and D.

Diagram Z: A line with points A, B, C, D. B is between A and C, C is between B and D.



Book prediction

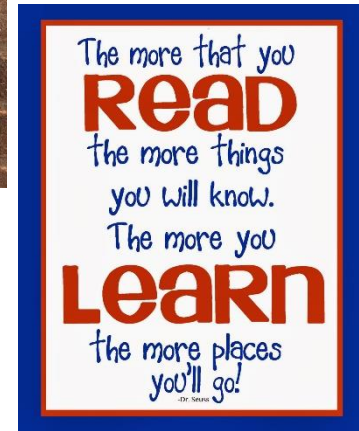
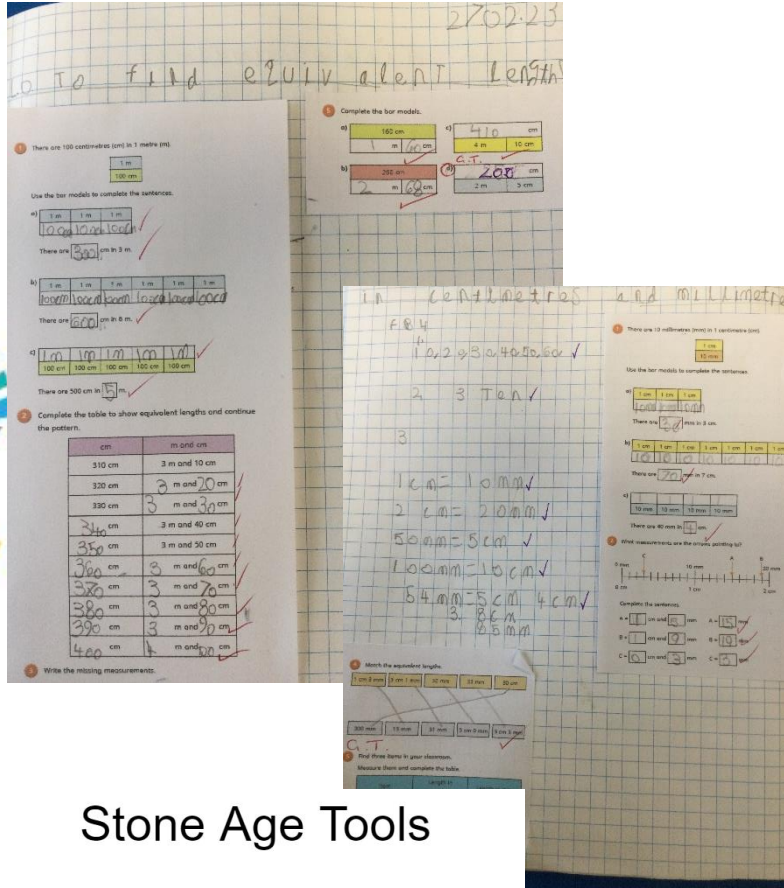
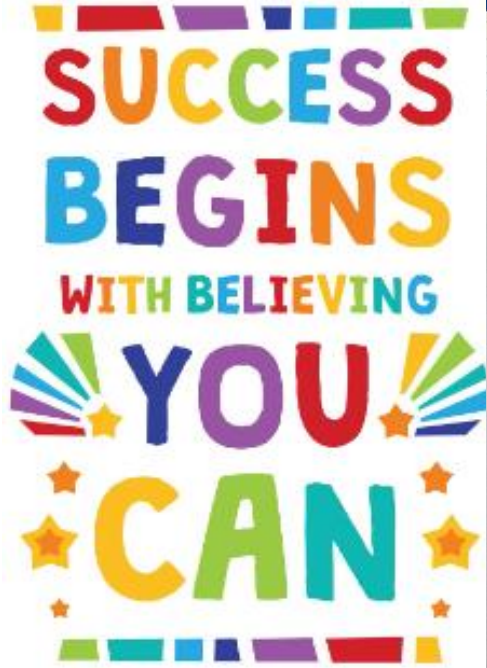


I predict ~~that~~ the girl is going to ^{steal} ~~steal~~ the spear and I think one of the characters are bad. Another reason is, because maybe the book is going to be about about the girl is going to go to another world however then ^{she will} it is going to look everywhere.



Part of being successful is about asking questions and listening to the answers.





Stone Age Tools

In the Stone Age they had tools to hunt. They lived in tents and moved around.



Stone Age food

They ate meat, nuts and fish.





No armbands
beyond this
point

JUST KEEP
Swimming



Mike

4A



IF YOU WANT A
DIFFERENT RESULT,
DO SOMETHING
DIFFERENT



Mollie-May

4J

Wednesday 1st March

L.O: To explain how the Tudor era began, when the Tudors came and how they lived.

Why did the Tudors make the Tudor quarter?

When did the Tudor era start?


When did the Tudors begin?



I know that Tudor people live in white and blue houses.

I found out that Tudors were from the past.

What do Tudors cook like?



A timeline is a help us by telling us when the time period is and if it is BC or AD. For example if it is in say Roman Britain it will say now is the present period that is AD or BC. The Tudor Britain started in 1485 and ended in 1603. AD means After Christ and BC means before Christ. Iron Age and Roman Britain come before the Tudors.



I know he is from the past because he is old. He was born in 1491 and died in 1547. His name is Henry the VIII. He reigned England from 1509 to 1547. He had 6 wives. He cut 5 of them off.

When he died his son became King.

VIPERS

S - Henry had 6 wives. They were Catherine of Aragon - No son - He divorced her. Anne Boleyn - Only had a daughter - Said she was unfaithful - executed. Jane Seymour - Loved her - Died shortly after of illness - Poisoned. Said she was unfaithful - executed. Catherine Howard - Said she was unfaithful - executed. Catherine Parr - Had a son - Henry died of old age so she survived him.

I - My impression was changed because he had six wives and executed all of them except for the sixth one had a son but he died from an old age.

Life in Tudor England



In the olden days, there were poor and poor people back then. They had to work a hard day. The people were poor. They had to work very hard to get money. The poor had to work very hard to get money. The poor had to work very hard to get money.

same.

1.0: I noticed the whole
5. a day
1) 6:6 = 1.2m
2) 2:2 = 1.1m
3) 3:3 = 1.1m
4) 4:4 = 1.1m
5) 5:5 = 1.1m
6) 6:6 = 1.1m
7) 7:7 = 1.1m
8) 8:8 = 1.1m
9) 9:9 = 1.1m
10) 10:10 = 1.1m
11) 11:11 = 1.1m
12) 12:12 = 1.1m
13) 13:13 = 1.1m
14) 14:14 = 1.1m
15) 15:15 = 1.1m
16) 16:16 = 1.1m
17) 17:17 = 1.1m
18) 18:18 = 1.1m
19) 19:19 = 1.1m
20) 20:20 = 1.1m
21) 21:21 = 1.1m
22) 22:22 = 1.1m
23) 23:23 = 1.1m
24) 24:24 = 1.1m
25) 25:25 = 1.1m
26) 26:26 = 1.1m
27) 27:27 = 1.1m
28) 28:28 = 1.1m
29) 29:29 = 1.1m
30) 30:30 = 1.1m
31) 31:31 = 1.1m
32) 32:32 = 1.1m
33) 33:33 = 1.1m
34) 34:34 = 1.1m
35) 35:35 = 1.1m
36) 36:36 = 1.1m
37) 37:37 = 1.1m
38) 38:38 = 1.1m
39) 39:39 = 1.1m
40) 40:40 = 1.1m
41) 41:41 = 1.1m
42) 42:42 = 1.1m
43) 43:43 = 1.1m
44) 44:44 = 1.1m
45) 45:45 = 1.1m
46) 46:46 = 1.1m
47) 47:47 = 1.1m
48) 48:48 = 1.1m
49) 49:49 = 1.1m
50) 50:50 = 1.1m
51) 51:51 = 1.1m
52) 52:52 = 1.1m
53) 53:53 = 1.1m
54) 54:54 = 1.1m
55) 55:55 = 1.1m
56) 56:56 = 1.1m
57) 57:57 = 1.1m
58) 58:58 = 1.1m
59) 59:59 = 1.1m
60) 60:60 = 1.1m
61) 61:61 = 1.1m
62) 62:62 = 1.1m
63) 63:63 = 1.1m
64) 64:64 = 1.1m
65) 65:65 = 1.1m
66) 66:66 = 1.1m
67) 67:67 = 1.1m
68) 68:68 = 1.1m
69) 69:69 = 1.1m
70) 70:70 = 1.1m
71) 71:71 = 1.1m
72) 72:72 = 1.1m
73) 73:73 = 1.1m
74) 74:74 = 1.1m
75) 75:75 = 1.1m
76) 76:76 = 1.1m
77) 77:77 = 1.1m
78) 78:78 = 1.1m
79) 79:79 = 1.1m
80) 80:80 = 1.1m
81) 81:81 = 1.1m
82) 82:82 = 1.1m
83) 83:83 = 1.1m
84) 84:84 = 1.1m
85) 85:85 = 1.1m
86) 86:86 = 1.1m
87) 87:87 = 1.1m
88) 88:88 = 1.1m
89) 89:89 = 1.1m
90) 90:90 = 1.1m
91) 91:91 = 1.1m
92) 92:92 = 1.1m
93) 93:93 = 1.1m
94) 94:94 = 1.1m
95) 95:95 = 1.1m
96) 96:96 = 1.1m
97) 97:97 = 1.1m
98) 98:98 = 1.1m
99) 99:99 = 1.1m
100) 100:100 = 1.1m

To could use two four children was chosen away from their friends and by by train because there was lots of children leaving town into city so they can be safe. Their names were Lucy, Peter, Susan and Edward. They had to live with a stranger since they had no one to go. They went to live with a woman with lots of hair. They four children went to go bed and take a bath every day. On the next day it was raining so they decided to explore the house. They go through a hall way and a green room. See a blue door. They go to a room with a window and everyone leaves except Lucy because she wanted to investigate. She opened the window and left one door open because she didn't want to look for help in. Lucy smells and feels the floor and staircase creaks. She held her hands out so she didn't hit the wooden floor but she couldn't see on going and see and it up in a flash. She explored it. See someone.



Tuesday 28th February 2023

0: To Write a persuasive letter ✓

Success Criteria	I think	My teacher thinks
I have accurately punctuated sentences with full stops and used capital letters	✓	✓
I have included an appropriate opening/closing	✓	✓
I have included comparisons	✓	✓
I have included persuasive language	✓	✓
I have included facts	✓	✓
I have used persuasive devices	✓	✓
I have used modal verbs	✓	✓

Rydges Green Primary
School, Claydon Ln,
D70 9UJ,
Tuesday 28th February

Exatlapanda dos Ministérios
Brasilia
Distrito Federal,
Brasil ✓

Dear Mr Silva,

I am writing to tell you that deforestation is a disgrace. Do you not agree? Well, how can you stand and let your people ~~destroy~~ ^{must} destroy your rainforests. You must ~~stop this~~ ^{stop this}. Did you know that 85% of all species are being killed each year because of deforestation. ✓

N5-More facts.

Sonia


113123 Firstly, deforestation harms animals up to 28 thousand species are to become extinct within the next 25 years because of ~~deforestation~~ ^{deforestation}. Also animals are not able to find their food so they start to ~~get~~ sick and then die.

Did you know that cutting down the rainforest makes us lose 20% of our oxygen. 20% of the world's oxygen is produced in the Amazon. ~~and~~ Do you want all of the animals to be extinct?

I hope you will take all of these facts into consideration and think carefully before you keep going and destroying the beautiful.

Yours faithfully,
Teanna Howell

Teanna **5KC**



TRY
YOUR
BEST

**DON'T
GIVE UP!**
THE MORE YOU PRACTICE,
THE EASIER IT WILL GET!
www.KidsCanReadandWrite.com



6R

Nadia

THE MOST IMPORTANT KEY
TO SUCCESS
IS HAVING THE DISCIPLINE
TO DO WHAT YOU KNOW
SHOULD BE DONE
EVEN WHEN YOU DON'T FEEL
LIKE DOING IT

Completion
44% 21 / 48

Average Last Score
81%

Time Spent
3h 51m

Completion
78% 76 / 97

Average Last Score
80%

Time Spent
18h 9m

Completion
59% 129 / 219

Average Last Score
87%

Time Spent
1d 9h

Completion
49% 30 / 61

Average Last Score
77%

Time Spent
4h 33m

Completion
76% 106 / 139

Average Last Score
75%

Time Spent
1d 3h

Completion
10% 7 / 68


Average Last Score
97%

Time Spent
21m 44s

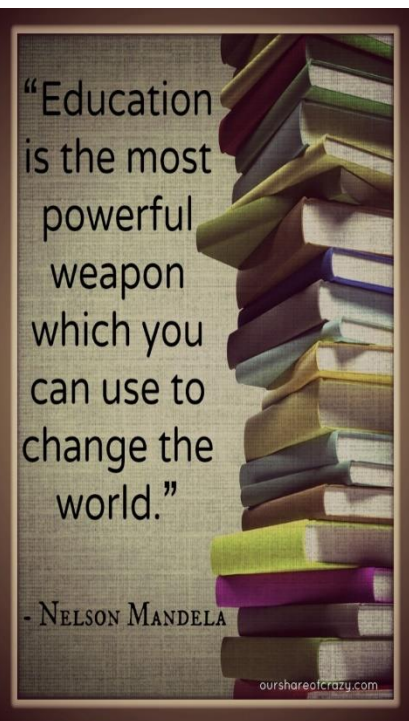
Completion
66% 49 / 74

Average Last Score
61%

Time Spent
9h 19m



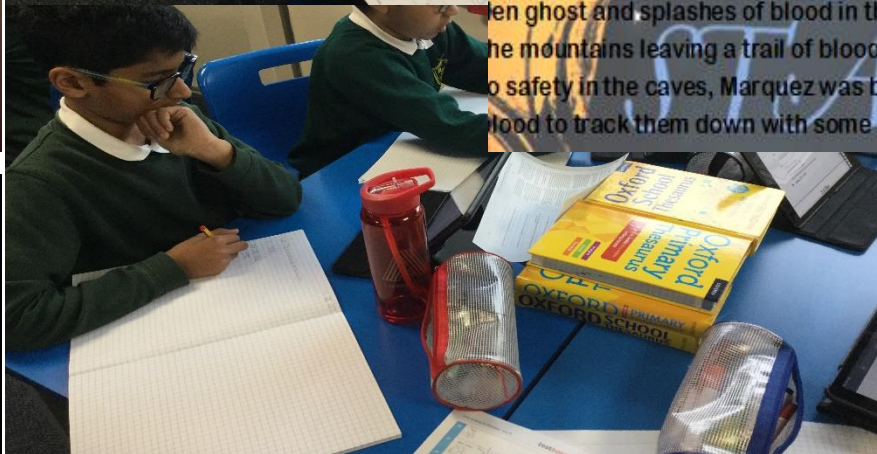

EFFORT



“Education is the most powerful weapon which you can use to change the world.”

- NELSON MANDELA

ourshareofcrazy.com



A sad day for Lupe

In the menacing forest, through the tumultuous mist and flashing skies Lupe could make out a small figure being crushed by a much larger creature. At this sight, Lupe and Isabella -alongside the young Banished- ran to the towering mountains, seeking shelter.

In the distance, there were sharp screams of pain and large crunching sounds of monstrous feet stepping on dead bodies. Quickly! Cross the river; there is a large opening in the mountains!"whispered Isabella, relieved.

Behind them they could hear the rustle of the large baobab trees (as if foliage was being disturbed). Seconds later, they crossed the river; however, one of the young banished had fallen into the river which was the home of a school of piranhas. Swiftly, the piranhas reacted and the water started to become a dark red. "Help! I am bleeding," said the young banished frantically. "Come on—you heard him don't just stand there, get to work!" said Lupe. They all got to work, lifting him out of the river. It was very laborious; however, they did it.

Once they got the young Banished to the surface, there was a hidden ghost and splashes of blood in the green. They carried him to the mountains leaving a trail of blood behind them. While they took to safety in the caves, Marquez was behind them using the trail of blood to track them down with some gruesome news.

Davan 6SE

rently fighting.

A few seconds later, after they had explored the cave Marquez had found the opening by following the trail of blood from the young Banished. Lupe saw him and said,

"Yes! We are safe! Marquez is here!," but now Marquez had to deliver the news.

"Lupe, I have to tell you something."

"What is it?"

"Y— your father - he isn't coming back,"

"NOOOO, PLEASE! PLEASE! I NEED TO GO BACK!"

But there was no time to cry; there was a group of three tibicenas but they were howling and swiftly ran up the mountain. Why?

Lupe went to check and, astonishingly, there was Arintara. They were saved but the tibicena surrounded Arintara and all pounced at her...

Armani 6A

1.3.22

1. To understand what percentages are.

1.2 0.66 1 0.125 3 0.25
3 3 2 7 0 9 8 1 7 0 10 10 12 12 13 10 10

2. 0.66

There are 37 parts out of a hundred shodd
This is 37%

1.03 There are 8 parts of a hundred shodd
This is 8%

1.6 There are 37 parts out of a hundred shodd
This is 37%

1.07 There are 8 parts out of a hundred shodd
This is 8%

2.9%

No because 50 is bigger than 25% so 50% is bigger

Wednesday 1st March 2023

1. To identify and name the main parts of the human circulatory system and describe the function of them.

I know that the heart pumps about 2000 gallons of blood and animals have cold blood and we have warm.

- Your blood travels to the lungs and picks up oxygen.
- The blood that is full of oxygen travels to the body we call this blood oxygenated.
- Veins carry blood back to the heart. When the blood has delivered out of its oxygen this blood is deoxygenated.
- Arteries carry blood away from the heart they take the blood around the body to make sure that the oxygen gets passed on to the organs and muscles.

When the blood gets turned back to the heart to pick up more oxygen so that the whole cycle starts again.

- The three parts of the circulatory system are the heart, the veins, and the arteries.
- The three types of blood vessels are veins, arteries, and capillaries.
- Oxygenated blood has more oxygen and it is pumped to the heart and to the rest of the body. Well deoxygenated blood has less oxygen and it is pumped back to the heart and out to the rest of the body.

The heart is a muscular organ that is made up of four chambers. The heart pumps blood through the blood vessels so that oxygen and nutrients can get to all parts of the body. The heart pumps blood out to the lungs to oxygenate it. The oxygenated blood is then pumped back to the heart and out to the rest of the body.

I can identify features.

Are we damaging our world?

Arguments for	Arguments against
<p>We are damaging our world because humans are responsible for the amount of litter and some of this ends up in natural spaces and in their habitats in wild life homes put at risk of illness, injury and even death.</p> <p>The amount of litter with chemicals have been leached into the environment.</p>	<p>Although we litter there is litter pickers who pick up to pick up litter for the environment.</p> <p>Animals do get hurt but the world has lots of supporters that help each out some animals die of predators or they get hit then with their claws.</p> <p>Ethical cars can take you places with no problem with children and babies will be happy to go to the destination. The scooter can take and then can...</p>





WOW of the Week