


WOW of the Term

Spring 2023





Swimming Celebrations at Ryders Green

10m
Bentley

25m
Simon
Gbagbo
Marta
Sameer
Halima
Zhia
Faizan
Julia
Aliyah
Aleeza
Atristan
Aleena
Chloe
Emmanuel
Nelli
Safia
Sonia
Tyler
Sneha

50m
Daisha
Ellis
Ahmad
Asher
Fulu
James
Philip
Teanna
Zayne

700m
Jake

1400m
Aadhya





Music Celebrations at Ryders Green

Elementary- Cornet
Distinction
Julia

Elementary- Trumpet
Pass
Ellis

Distinction
Kashmala
Zuzan
Eliel
Zhia
Ava

Elementary- Tenor Horn
Pass

Merit
Jaina
Oliver

Distinction
Jake
Samjik

Elementary- Ukulele
Merit
Labib
Eloise

Distinction
Parneet

Grade 1 - Ukulele
PASS
Ali
Armani
Bilal
Mohammed
Oliwier
Tawid

Merit
Atreyu
Bavin
Elizabeth
Jessica
Sumayyah
Sneha
Mrs Humphries

Distinction
Thomas
Denis
Katelynn
Lukasz
Mehwish
Stephen




RLP– Aiyah Rahman



Aiyah
Tell Me What You See: Spring
Writing Activity

Write about what you can see in the picture.



It is a frog in a pond
He has a big eye.

A worksheet titled "Tell Me What You See: Spring Writing Activity" by Aiyah. It features an illustration of a frog in a pond. Below the illustration, there is a speech bubble that says "Write about what you can see in the picture." At the bottom, there is a handwritten response: "It is a frog in a pond. He has a big eye."

Aiyah
03/03/22
Addition within 10
Fill in the boxes to complete the calculations.

$5 + 0 =$ <input type="text" value="5"/>	$0 + 3 =$ <input type="text" value="3"/>
$3 + 6 =$ <input type="text" value="9"/>	$2 + 3 =$ <input type="text" value="5"/>
$1 + 1 =$ <input type="text" value="2"/>	$1 + 3 =$ <input type="text" value="4"/>
$2 + 8 =$ <input type="text" value="10"/>	$1 + 7 =$ <input type="text" value="8"/>
$8 + 1 =$ <input type="text" value="9"/>	$4 + 0 =$ <input type="text" value="4"/>
$0 + 0 =$ <input type="text" value="0"/>	$1 + 2 =$ <input type="text" value="3"/>

A worksheet titled "Addition within 10" by Aiyah, dated 03/03/22. It contains a grid of 12 simple addition problems. Each problem has a box for the answer. The problems are: 5 + 0 = 5, 0 + 3 = 3, 3 + 6 = 9, 2 + 3 = 5, 1 + 1 = 2, 1 + 3 = 4, 2 + 8 = 10, 1 + 7 = 8, 8 + 1 = 9, 4 + 0 = 4, 0 + 0 = 0, and 1 + 2 = 3.

RJP – Adam Hadasok



Adam has really impressed us since starting school full time this term. At the start of the school year Adam struggled to listen in class and his behaviour was not always the best. However, since coming to school everyday Adam has worked so hard and is now making good progress with his counting and phonics and his behaviour is now really good! Well done Adam!

IB - Raffia

Thursday 9. March 2023
 L.O: To change a detail in the story.

Success Criteria:	I think	My teacher thinks
can change a detail in a story.		✓
can use a description using adjectives.		✓
can extend my writing using 'and'.		✓
My peers think	✓	Comment

In my story Biscuit Bear going to my house to play with me with my dolls.
 or what else did the biscuit bear do at your house?
 In my story Biscuit Bear was sad because he was too old. So Biscuit Bear's friends because he was too old. Biscuit Bear's friends because so he can have friends so they I go off my because I got Biscuit Bear and Biscuit Bear was so happy!


Thursday 9. March 2023
 L.O: To find out about Walter Tull
 To understand some of the differences in how Walter Tull lived compared with today.
 To put World War I within a historical framework.

~~community and did eraser playgrounds~~

Both playgrounds have trees and benches ✓
 playgrounds were different before because they had swings and slides ✓

My timeline

1914	1917	2023
World War I	World War I	Today






Raffia has shown a huge improvement in her learning and is making excellent progress. She is being more enthusiastic about her learning and completing tasks independently. She is starting to be more involved in group activities and is a very kind and caring class member.



Avery IH



Wednesday 11th January 2023
 LO: To describe and compare the structure of a variety of common animals.

Amphibians	Reptiles	Mammals
		
1. mamms lafca 2. mamms ayejs	1. Reptiles lafca 2. Reptiles lafca	1. mamms gglite 2. mamms lafca

Which two animal groups are cold-blooded?
 Amphibians lafca and Reptiles lafca

Which two animal groups have lungs?
 Amphibians lafca and Mammals

Tuesday 7th Ma
 LO: To describe
 Success Criteria:
 I can use 'and' to join clauses.
 I can use apostrophes for contractions.
 My peers think




Biscuit Bear has small eyes.
 Biscuit Bear has a short tail.
 Biscuit Bear has got brown fur.
 Biscuit Bear has a round nose.
 Biscuit Bear has round ears.
 Biscuit Bear has brown feet.

LO: To describe a character's
 Success Criteria:
 I can use my sounds.
 I can use my finger senses.
 I can explain letters and full stops.
 I can use adjectives to describe.
 I can use 'and' to join clauses.
 I can use apostrophes for contractions.
 My peers think



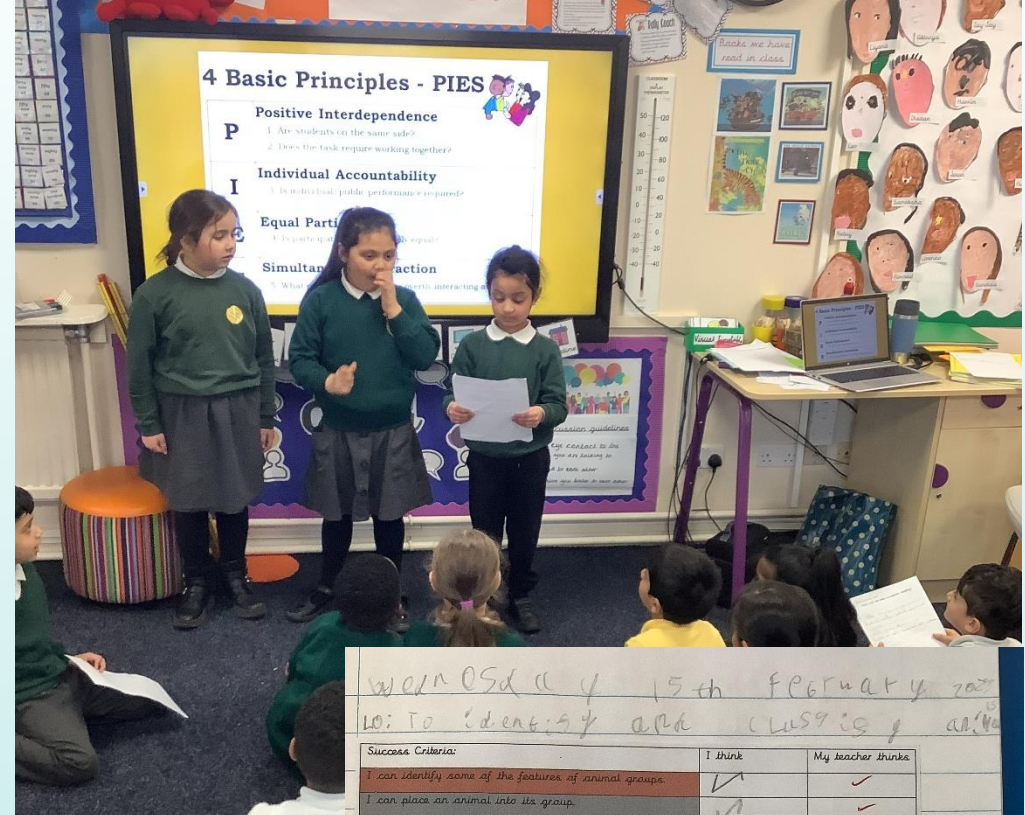
Jack has short hair and red hair.
 Jack is brave climbing the tree.
 Jack is eight years old because Jack
 he won't show mom the pens.



09.03.23
 LO: To measure in grams.
 The banana is 100g. The cheery is 11cm long.
 1 x 5 = 50 ✓
 3 x 5 = 150 ✓
 The pencil is 15g ✓
 The bear is 20g ✓
 The apple is 15g ✓
 The ruler is 20g ✓
 The coin is 10g ✓
 The banana is 65g ✓
 The pear is 150g ✓
 It is the peak ✓
 The apple is 40g ✓

2P - Eknoor


11:40 AM
 14.04.12 The lights
 The picnic 12:30 AM went out.
 14:45 AM Lifeboats were
 15:40.12 lowered.
 2:10 PM The boat
 broke into
 two pieces.
 12:11 AM
 The boat
 began to sink



Wednesday 15th February 2023
 LO: To identify and classify animals.

Success Criteria:	I think	My teacher thinks
I can identify some of the features of animal groups.	✓	✓
I can place an animal into its group.	✓	✓
I can explain an animal's classification.	✓	✓
My peers think:	✓ ⊗	Comment:

Thursday 26th January 2023
 LO - to make a fruit kebab




Dogs are mammals because they have hair and they have pups.
 Snakes are reptiles because they have eggs.
 Robins are birds because they have had eggs.
 Goldfish are fish because they don't have legs.

Challenge:
 Whales are fish because they both eat.



2D – Leah



Thursday 2nd March 2023
 LO - to begin to explore the work of Giuseppe Arcimbaldo.

What can you say about the work of the artist Giuseppe Arcimbaldo? His work is very realistic.

Friday 17th March 2023
 LO: To plan a story.

My own story plan

Title Izzy Gizmo

Characters
 Izzy Gizmo
 crow
 Granpa
 vet

Adjectives
 disapaicented
 creative kind
 clever upset

Beginning
 • Izzy is disapaicented.
 • Her inventions do not work.
 • Granpa told Izzy not to give up.

Middle
 • A crow falls and ~~tra~~
 • The crow ~~break~~ broke his wing.
 • Izzy ~~took~~ took the crow to the vet.

Ending
 • Izzy ~~trays~~ trays to make the crow fly.
 • She makes new wings.

28.02.23
 LO: To compare lengths and heights

1. 1cm ✓
 2. 1.8m > 8m ✓
 3. 20 ÷ 4 = 4 ✓

1) The rubber is 4cm ✓
 The crayon is 9cm ✓

2) The rubber is shorter than the crayon ✓
 The crayon is longer longer than the rubber ✓

3) The flower is shorter than the glass ✓
 The sharp sharp sharpener is sharper ✓
 4) 4.9cm < 2.3cm ✓
 5) 5m < sixteen metres ✓
 6) 8.7cm > 8.3cm ✓
 7) 8.7cm > 1cm ✓
 8) 5.2cm < 4.1cm ✓
 9) 1.4cm < 1.4cm ✓
 10) 1.4cm > 1.2cm ✓
 11) 1.2m < 1.7m ✓
 12) 2.0m < 2.0m ✓

Monday 6th March 2023
 LO: To predict and make inferences based on what is being said.

This is a picture of Izzy Gizmo. What do you think she has invented and why as she invented it?

~~~~~

- I predict that she made a flying machine.
- The title of the book is Izzy Gizmo.
- The author is Pip Jones and the illustrator is Sara Ogilvie.
- I think that she made wings so she can fly.

Tuesday 14th March 2023  
 LO: To sequence the events of the Titanic on a timeline.

| Success Criteria                                                                         | I think | My teacher thinks |
|------------------------------------------------------------------------------------------|---------|-------------------|
| I can create a detailed picture of what the events that happened when the Titanic sank.  | ✓       | ✓                 |
| I can use my story skills to take part in a role-play activity.                          | ✓       | ✓                 |
| I can create a detailed timeline to show the events that happened when the Titanic sank. | ✓       | ✓                 |
| I can use my story skills to show how the people on the Titanic might have felt.         | ✓       | ✓                 |

My peers think: ✓

11:45pm 1912  
 14-04  
 The Titanic hits an iceberg.

12:30am 15-04 1912  
 Life boats were lowered.


2:10am  
 The lights went out.

2:17am  
 The Titanic broke in two.

peppercorns ✓




NO BEAUTY  
shines brighter  
than that of a  
GOOD HEART

# 3H - Joshua



...the story of the stone age the chapter is *Wolfskaden/Crow* *Beary*  
 chapters 1 A girl came and said that all the family get excited and go and kill the animal but *Beary* stayed home and shadow and his brother go as the all and catch up and he need to look after the lamb but he got a slip and a bed for the lamb  
 Chapter 2 *Beary* had had meat will that he happy and shadow went to get some nice egg and gave some to *Beary*

Independent Work



All of the subordinate clauses in these sentences are at the end. Try to spot where the main clause is and where the subordinate clause is. Write the subordinate clause in purple pen.

- 1) The sun was shining in the sky because it was summer.
- 2) I would like to dance at the talent show but I will probably be too shy.
- 3) I will work hard to become a scientist because it is my dream.
- 4) I love to go on aeroplanes but I am scared of heights.
- 5) The children kicked the classroom before they went home.
- 6) Jessie saw an alien that was bright purple.

1. The sun was shining in the sky because it was summer.  
 2. I would like to dance at the talent show but I will probably be too shy.  
 3. I will work hard to become a scientist because it is my dream.  
 4. I love to go on aeroplanes but I am scared of heights.  
 5. The children kicked the classroom before they went home.  
 6. Jessie saw an alien that was bright purple.  
 I love to go on aeroplanes but I am scared of heights.  
 Jessie saw an alien that was bright purple.  
 The children kicked the classroom before they went home.

To understand and use possessive apostrophes for singular possession.

Rewrite these sentences using an apostrophe to show possession.

1. The bike belongs to Sarah.
2. The pizza belongs to Timmy.
3. The train belongs to Sammy.
4. The hairbrush belongs to Rachel.
5. The pen belongs to Ben.
6. The cat belongs to Timmy.

ns - The brakes on the bike were squeaky.  
 This is a brakes on the bike and it is squeaky.  
 The brakes on the bike were squeaky.

Independent Work





**Manners cost nothing but mean everything.**

-Rubyanne


Read, Love and Learn  
[facebook.com/readloveandlearn](https://www.facebook.com/readloveandlearn)

To understand and compare how and substantial changes  
 Mom and dad took me to the zoo where I saw the elephant.  
 On Monday morning, the children went on a trip.  
 Although it was early, the little girl demanded chocolate.  
 Even though I am scared of heights I love to go on aeroplanes.  
 Because it is my dream, I will need to become a scientist.  
 The case was dark and damp made me shiver with fright.  
 Interestingly, the sun was shining the sky, even though it was winter.



Wednesday 22nd March 2023  
 To understand the changes that led to the Iron Age  
 Which person do you think is more important in the community?  
 Which person would be more likely to have bronze weapons and jewellery?  
 Who would have more likely fought with an iron dagger or small iron sword?  
 I think that the General is the most important in the community because he looks like a King who has lots of jewellery and he has a shield to protect himself.



# 3R – Jeshmi




**YOU ARE  
 SUPERDUPER  
 AMAZING  
 TALENTED  
 GO GETTER  
 LET NOTHING  
 STAND IN  
 YOUR WAY  
 EVER**

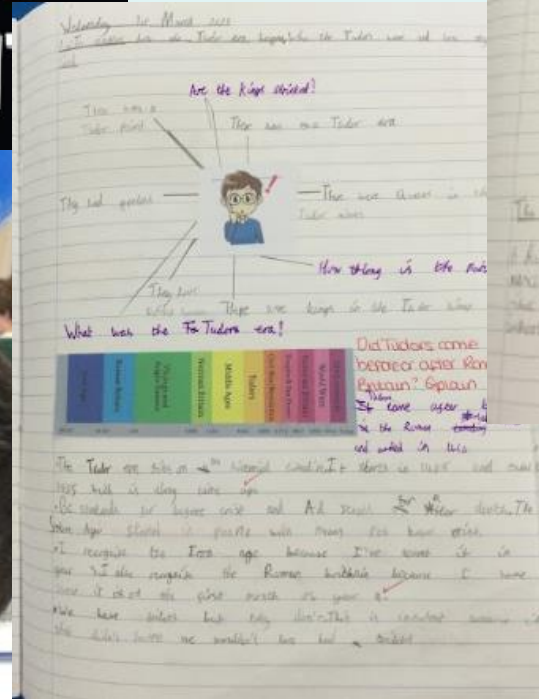


# 4A – Ahsan

**THANK YOU**  
FOR BEING SUCH AN  
*Awesome*  
& **AMAZING**  
**STUDENT!**




**Being a role model is the most powerful form of educating.**



**Be a wonderful role model because you will be the window through which many children will see their future.**

Thomas McKim Wood




Wednesday 15<sup>th</sup> March

L.O: To explore diseases in Tudor Britain how it would have been treated and make comparisons with the modern day.



it's a cold.

I don't think in Tudor times they will be able to have vaccines because they don't know how to check people's blood or heart because they needed tools for your heart or head so you know it's a fever or it's a cold.



From one text I learnt Henry VIII was the first one to tell people to get up a second each year to learn inside the human body. This made them learn about the human body and how diseases happen in a human body.



I wouldn't like to have been treated by a Tudor doctor because they would put leeches on their body to suck up all the blood. You can die when you have no blood. When I look at it it feels like it's going to be sticky and I don't like bugs either. Also they don't wash their tools or hands over if it had blood on it it makes you feel worse and worse looking at it.

These tools or hands over if it had blood on it it makes you feel worse and worse looking at it.

Evaluate question.

One consequence of drinking wine might be cause the doctor to get ill and it might spread to many people. Many people might try this because it might be to them it will be a good idea.

P: I would prefer to be treated by a folk cure because I don't like bugs if a leech was on your skin for an hour sucking your blood you will be weak and might die.

Tudor Plagues

Covid 19 patients

• They put leeches to suck up blood.  
• We need blood for energy because blood is good for our body.

• Tudors wear masks with gloves inside.  
• Doctors wear gloves and masks.

• Tudor doctors would wash their hands or clean their tools.  
• Doctors now days when tools so it doesn't spread to the other person.

• Tudor doctors don't care for wash hands because they don't know germs will spread everywhere.  
• We use antiback or wash our hands with soap to keep everyone healthy and our self healthy.

They put spiders in bottles and eat it or put a leech on a goat.  
When we have headaches we might put a mint on our heads or drink some medicine.

L.O: To show a deeper understanding of Tudor goods and how Tudor gardens were used through STEM activities and reflection of our school trip.



On the trip I learnt in Tudor children would drink beer but beer is not unhealthy. My <sup>favorite</sup> food was they would hang bags babies to walls so they don't escape. The most disgusting thing I learnt Tudors clean their clothes in wine but wine smells bad and has lots of germs very disgusting. My <sup>favorite</sup> activity was learning how to use a jigger quilt we would list things rich Tudors had and poor Tudors would use only wood for anything. My <sup>favorite</sup> thing about Tudor houses was for color and wood would show how rich you were and how poor you are if your house looks poor. One more food I enjoyed was how much fancy clothes rich Tudors would wear they would wear fancy hats and clothes but I really found interesting they would hang babies on walls it was really funny for me.

# 4J -Suhana

This is a painting made by Georges Seurat he is ~~that~~ one of the many famous painters. And he was drawn this painting in dots and this might take hours to do.

Georges made a painting of a girl who is alone on stage playing a lute all alone.

Georges Seurat made this art in dots really realistic and make it it's very interesting.

Fun Fact  
He has lots of famous friend that show incredible!

Georges Seurat

|    |                                                         |
|----|---------------------------------------------------------|
| 1d | $\frac{3}{8} + \frac{1}{2} = \frac{4}{8}$               |
| 2a | $\frac{2}{7} + \frac{2}{7} = \frac{4}{7}$               |
| 2b | $\frac{1}{6} + \frac{1}{6} = \frac{2}{6}$               |
| Q3 | maximizing digits                                       |
| 2c | $\frac{4}{7} + \frac{8}{7} = \frac{12}{7}$              |
| 2d | $\frac{2}{7} + \frac{1}{7} + \frac{3}{7} = \frac{6}{7}$ |
| 3a | $\frac{3}{7} + \frac{3}{7} = \frac{6}{7}$               |
| 3b | $\frac{3}{7} + \frac{4}{7} = \frac{7}{7}$               |

Dear my loving family,

I've been so worried about you guys <sup>Lolly</sup> so I am writing this letter for you. You might be worried too about me and my sisters and brothers but don't worry about us we are living with a kind lovely person he has a great house and he cares alot about us. I am so excited to tell you all the fun and dangerous things that happened to me but don't worry to much because it was so lovely and fun. Let me start this dangerous and fun gun adventure story it all started me going to a empty empty empty room with a wood drop you might think a wood drop what wood drop?



# 5DC – Aadhya

Wednesday 8th February

L.O: To write a report on Manaus.


**Oceans**

- Pacific ocean.
- Atlantic ocean.

**LIFE IN MANAUS**

**Physical Geography**

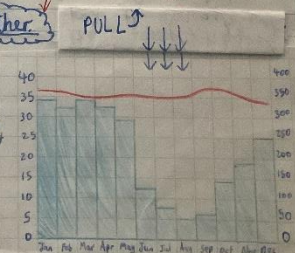
Manaus is a city residing in the Amazonas. This state is part of Northern Brazil. Brazil is a country that is in the continent - South America.



Manaus is in the heart of the widely known Amazon rainforest. It is located on the banks of the Amazon River. 60% of the largest rainforest is in Brazil.

**Weather**

Max Temp  
Average wet days



Feb Mar Apr May Jun Jul Aug Sep Oct Nov Dec



March

L.O: To investigate the properties of materials.

**Key words:**

- Materials.
- Burning.
- Rustling.
- New material.

**Materials:**

- Plastic.
- Paper.
- Wood.
- Cardboard.
- Fabric.
- Glass.
- Perspex.
- Aluminium.
- Metal.
- Steel.
- Brick.
- Latex.
- Artex.
- Cement.
- Gard.
- Rubber.
- Straw.
- Plaster.
- Concrete.

**Materials continued:**

- Mirror.
- Brass.
- Tissue paper.
- Polystyrene.
- Melamine.
- UPCV.

**Properties:**

- Malleability.
- Strength.
- Absorbency.
- Feel.
- Elasticity.
- Appearance.
- Lustrousness.

| Material        | Used?      | Malleability | Lustrousness | Feel   |
|-----------------|------------|--------------|--------------|--------|
| Paper           | Books      | Very         | None         | Smooth |
| Melamine        | Whiteboard | None         | Very         | Smooth |
| Wood            | Cabinet    | None         | None         | Smooth |
| Synthetic fiber | Carpet     | None         | None         | Soft   |
| Mirror          | Laptop     | None         | Very         | Smooth |
| Cardboard       | Box        | Very         | None         | Bumpy  |



L.O: Area of compound shapes.

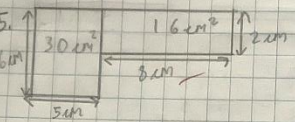
Flashback 4.

1. 36 ✓

2. 24m ✓

3. 27m<sup>2</sup> ✓

4. 45 ✓

5. 

30 + 16 = 46cm<sup>2</sup> ✓

Area = 46cm<sup>2</sup> ✓

Worksheet

a. 12cm<sup>2</sup> ✓

b. 18m<sup>2</sup> ✓


c. 12cm<sup>2</sup> ✓

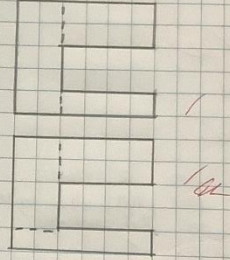
d. 10cm<sup>2</sup> ✓

e. 22m<sup>2</sup> ✓

f. 72m<sup>2</sup> ✓

g. 43m<sup>2</sup> ✓

4a.  41cm<sup>2</sup> ✓

4b. 

4c. Alex made the shape into a whole rectangle and took away the extra part. ✓

5a. 184cm<sup>2</sup> ✓

5b. 204cm<sup>2</sup> ✓



Handwritten math problems and solutions:

$4 \times 10 = 253.4$  ✓  
 $1.00 = 1.28$  ✓  
 $0 = 2.6$  ✓  
 $10 = 55.5$   $0.555$  ✓  
 $0 = 3.6$   $0.36$   
 $2$  ✓  
 $1.2$  ✓  
 $3 \times 4 = 12$  ✓  
 $3 \times 0.4 = 1.2$  ✓  
 $9$  ✓  
 $7.2$  ✓  
 $8.7$  ✓  $4.01$  ✓  
 $2.9$  ✓  $24.06$  ✓

1a)  $2 \times 4 = 8$   
 $2 \times 0.4 = 0.8$   
 1b)  $2 \times 7 = 14$   
 $2 \times 0.7 = 1.4$   
 1c)  $3 \times 5 = 15$   
 $3 \times 0.5 = 1.5$   
 2a)  $3.2$   
 $\times 3$   
 $9.6$  ✓  
 2b)  $4.6$   
 $\times 2$   
 $9.2$  ✓  
 $2$   
 3a)  $1.2$   
 $\times 3$   
 $3.6$  ✓  
 $6$  ✓

| 100 | 1000 | 10000 |
|-----|------|-------|
| 000 | 000  | 000   |
| 000 | 000  | 000   |

Tuesday 14<sup>th</sup> March 2023

Blood Vessels

Blood is very important. It moves oxygen and the from food and water to where they are needed in. Blood also transport the waste products to the lungs to be removed from the body.

Arteries      Capillaries      Veins

Arteries  
Arteries carry oxygenated blood away from the heart

Veins

# 6A LABIB

LO: To understand what minerals are and question if they are sustainable.

Vocabulary

Fossil Fuel: buried organic material from deceased plants or that have been converted to oil, coal and gas over hundreds of years.

Oil and minerals are mined from deep underground. ✓  
 They are quite taken to a refinery.

Stone      rock

1000 are in Coke  
 Waste gas  
 1000 are in Blast Furnace

Are we damaging our world?





To Save our World - don't litter oceans and grounds because the Earth will be damaged. All we need to do is pick up the litter to save our world.

There is so much litter everywhere in the world, damaging the Earth. We have to save our world so don't litter where you are in the world.

Wasting food, fuel everywhere in the world, the cars have to burn fuel. Food and fuel can't damage the world. We should not waste food.

There are so many cars everywhere in the world, the cars have become in the city of a town. In the town, cars are everywhere.

Don't litter, don't waste food, in the world. To save our world.





6R



- I am UNIQUE
- I don't give up
- It's okay to make mistakes
- I always TRY my best
- I am KIND
- I am PROUD of who I am
- I can achieve great things
- I BELIEVE in myself
- I am LOVED
- My feelings matter
- I CAN make a difference



Being a Role Model is the Most Powerful Form of Educating.

John Wooden



# 6SE - Ibshan

17.3.26  
 6SE  
 60cm  
 width - 4cm  
 length - 5cm  
 height - 3cm  
 60cm is the same as the width.  
 No because it will be the same number.  
 1.5cm<sup>2</sup>  
 5.4cm<sup>2</sup>  
 4.2cm<sup>2</sup>  
 8cm<sup>2</sup> / 6.4cm<sup>2</sup> / 5.2cm<sup>2</sup>  
 1.4cm<sup>2</sup>  
 1.5m<sup>3</sup>  
 1.0.2cm<sup>2</sup>  
 Fruit basket

17.3.26  
 6SE  
 60cm  
 width - 4cm  
 length - 5cm  
 height - 3cm  
 60cm is the same as the width.  
 No because it will be the same number.  
 1.5cm<sup>2</sup>  
 5.4cm<sup>2</sup>  
 4.2cm<sup>2</sup>  
 8cm<sup>2</sup> / 6.4cm<sup>2</sup> / 5.2cm<sup>2</sup>  
 1.4cm<sup>2</sup>  
 1.5m<sup>3</sup>  
 1.0.2cm<sup>2</sup>  
 Fruit basket

I can find the volume by multiplying length, width and height.  
 13-17th March SATs mock week  
 Have you heard of the term 'commutative'?  
 Look it up & then tell me how it

**MIME** GCSE MATHEMATICS  
 mathsmadeeasy.co.uk AQA | Edexcel | OCR | WJEC (Level 3 - 4)

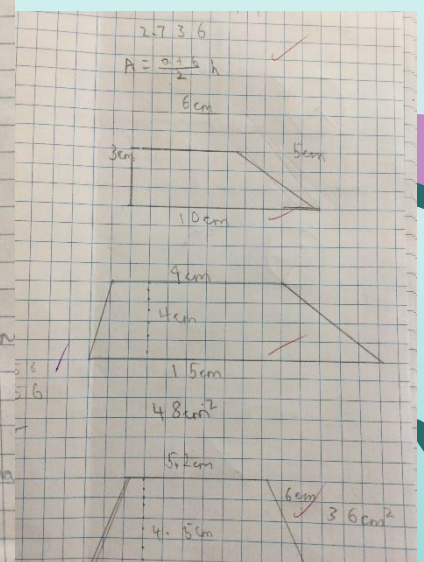
## Collecting Like Terms

Please write clearly in block capitals

Forename: IBSHAN  
 Surname: MIRZA

10. To find the mean of a set of numbers.  
 a day  
 100  
 180  
 60%  
 40%  
 6SE  
 course if you calculate the mean, this is what you will get:  
 4 + 2 + 3 + 1 + 3 + 1 + 3 = 18  
 18 ÷ 7 = 2.57  
 3 - 4 is approximately 16, which is higher than 15.  
 8 cm

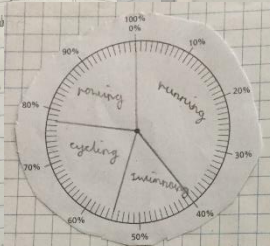
Angle b - reflex  
 Angle c - right angle  
 Angle d - obtuse.  
 91°  
 50°  
 55°  
 Exit ticket  
 No because the angle is an acute angle  
 Tiny measured the width now.  
 No she can measure the acute angle and take it away from 3.6°



Have you always been fascinated in knowing about renewable energy like solar power? It would be amazing to see the way solar energy functions for electrical purposes and what it can provide to us or our planet - and you know it takes 46 weeks to power a large city! It also comes with commission and even your electricity bill - to find out more - than keep reading!




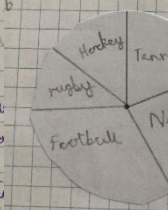
10. To continue to do it.  
 S.C  
 see 21.2.23

Since Dave has lived in London since he has he could have moved but decided what is solar power?  
 So what is solar power? It is an actual source that is generated from natural energy. It is called solar because all comes from space. The main purpose to heat energy or converted into electric great for homes as solar power does not cost this makes it renewable. The panels would absorb the sunlight, creates electrical charges that move to an internal electrical field in electricity to flow.  
 e.g. photos  
 I can use proper words for who and be able to write a letter - I can use a question e.g. what is solar power?



| Meal choice | Frequency | Number of degrees |
|-------------|-----------|-------------------|
| Meat        | 20        | 160°              |
| Fish        | 16        | 90°               |
| Vegetarian  | 13        | 78°               |
| Vegan       | 7         | 42°               |
| Gluten free | 4         | 24°               |
| Total       | 60        | 360°              |

| Sport    | Number of children | Number of degrees |
|----------|--------------------|-------------------|
| Tennis   | 7                  | 7 × 10 = 70°      |
| Netball  | 8                  | 70°               |
| Football | 12                 | 120°              |
| Hockey   | 5                  | 50°               |
| Rugby    | 4                  | 40°               |
| Total    | 36                 |                   |



Congratulations and  
well done to all the  
pupils for your hard  
work.

